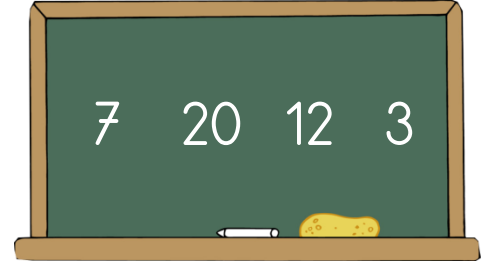
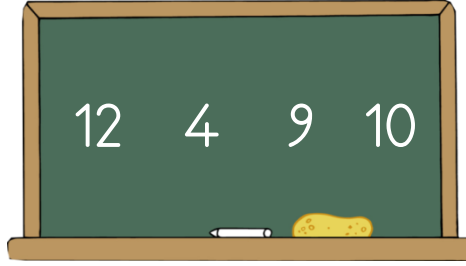
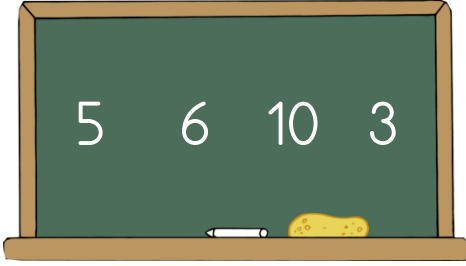


Adı :
Soyadı:

1 . Sınıf
Matematik

Doğal Sayılar
Sıralama-1

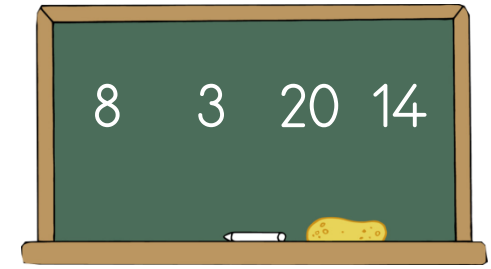

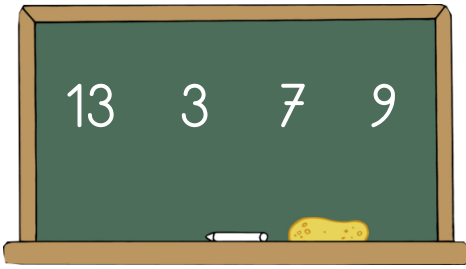
En büyük sayıdan en küçük sayıya sıralayınız.



--	--	--	--

--	--	--	--




--	--	--	--



--	--	--	--

--	--	--	--

--	--	--	--



14	16	12	13	18

17	9	0	20	3

Adı :
Soyadı:

1 . Sınıf
Matematik

Doğal Sayılar
Sıralama-1

En küçük sayıdan en büyük sayıya sıralayınız.

9 7 5 10

11 3 6 13

8 19 0 7

2 0 11 8

5 18 0 1

20 14 16 19

14 19 13 12 15

11 10 9 15 8

....

....

20 0 1 10 19

4 7 2 18 15